


Investigating lines of symmetry

Name:

Date:.....


Find and draw all the lines of symmetry on these 2D shapes. You can use a mirror or tracing paper to help.



I have lines of symmetry.




I have lines of symmetry.




I have lines of symmetry.



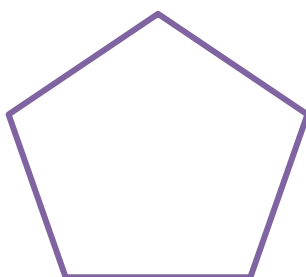
I have lines of symmetry.



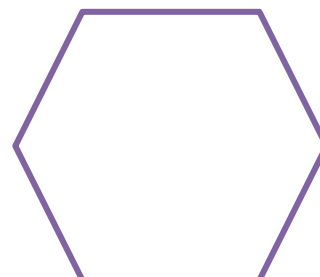
I have lines of symmetry.



I have lines of symmetry.



I have lines of symmetry.



I have lines of symmetry.